


Session 4

Subject: Reading

Approx. Time: 1 Hour

Video Link: 16.07.2020 Year 3/4 Learning Video available on the Redbrook Hayes Youtube Channel: <https://www.youtube.com/channel/UCIFJ2mgAVnzBiTPmd2yYidw>

Recording: Please answer all questions when promoted in the video in your exercise book.



Read chapter 13.

QUESTIONS

1. What was the Queen and Prince Philip watching on the TV?

The Queen and Prince Philip were watching_____.

2. Why do you think the Lady-in-Waiting looked puzzled?

I think the Lady-in-Waiting looked puzzled because_____.

3. Were your predictions correct that you made about the story? Justify your answer.

My predictions were correct/incorrect because_____.

4. Which part of the story did you find the most interesting or exciting? Explain why.

I thought_____ was the most interesting/exciting part of the story because_____.

Session 4

Subject: Writing

Approx. Time: 1 Hour

Video Link: 16.07.2020Year 3/4 Learning Video available on the Redbrook Hayes Youtube Channel: <https://www.youtube.com/channel/UCIFJ2mgAVnzBiTPmd2yYidw>

Recording: Please answer all questions when promoted in the video in your exercise book.

Task:

**Write a News Paper report about
the Queen's Hero – Titus!**

Session 4

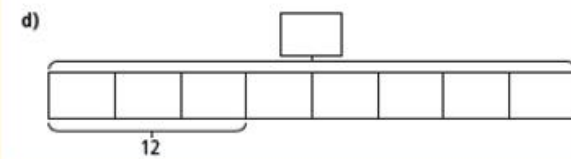
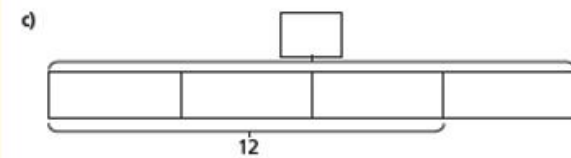
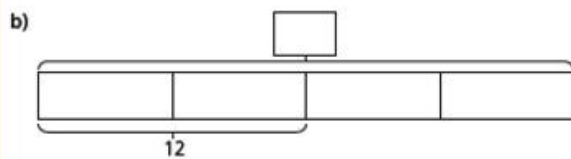
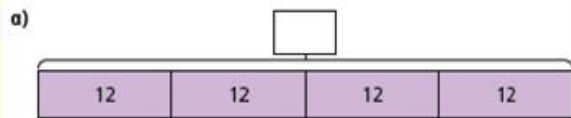
Subject: Maths

Approx. Time: 1 Hour

Video Link: 16.07.2020 Year 4 Learning Video available on the Redbrook Hayes Youtube Channel: <https://www.youtube.com/channel/UCIFJ2mgAVnzBiTPmd2yYidw>

Recording: Please answer all questions when promoted in the video in your exercise book.

Complete the bar models and fill in the whole.



a) $\frac{1}{2}$ of = 30

e) $\frac{3}{7}$ of = 15

b) $\frac{1}{2}$ of = 15

f) $\frac{5}{7}$ of = 15

c) $\frac{1}{4}$ of = 15

g) $\frac{5}{7}$ of = 35

Dora and Mo have a full bottle of juice.

Dora drinks $\frac{2}{5}$ of the juice.

Mo drinks $\frac{1}{5}$ of the juice.

There is 150 ml of juice left in the bottle.

How much juice was in the full bottle?

ml